

EXAMPLE TEST QUESTIONS

- 1. The type of business structure that is time limited is the:**

 - a.) partnership.
 - b.) sole proprietorship.
 - c.) joint venture.
 - d.) corporation.

- 2. When a contractor will provide the financing, permitting, and land for the owner of a project, this is called a:**

 - a.) Traditional Contract.
 - b.) Turnkey Project.
 - c.) Phased Contract.
 - d.) Fast-track Project.

- 3. The retainage is paid the contractor:**

 - a.) at the midway point of the project.
 - b.) when the project is substantially completed.
 - c.) when the project is finished.
 - d.) when the lien period has expired and no lien has been filed.

- 4. Which planning tool below would identify the expected dollar amounts of progress payments and when they would occur?**

 - a.) Critical Path Schedule
 - b.) Bar Chart
 - c.) Time Scale Chart
 - d.) Cash Flow Schedule

- 5. Which item below would be considered part of the company general overhead?**

 - a.) The telephone at the contractor's main office.
 - b.) Cleanup at the job site.
 - c.) Temporary Access Roads built at the job site.
 - d.) Cash in the contractor's bank account.

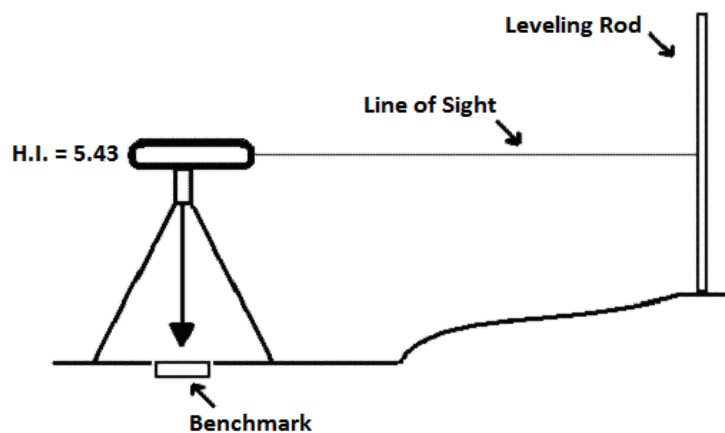
- 6. Theft of office equipment would be covered under which type of policy below?**

 - a.) Comprehensive General Liability.
 - b.) Officer's Liability.
 - c.) Builder's Risk.
 - d.) Property Insurance.

- 7. The Occupational Safety and Health Act requires which employers to have an emergency action plan in place for their employees?**

 - a.) All employers.
 - b.) Only employers with 15 or more employees.
 - c.) Only employers doing business with the federal government.
 - d.) Only employers doing business with hazardous materials.

8. **From the time the Board receives the contractor's license application to the time the license is issued, out of state applicants have a mandatory waiting period of:**
- 15 days.
 - 30 days.
 - 45 days.
 - 60 days.
9. **Which type of license below requires a four hour course in "Unfair Trade Practices and Consumer Protection Law"?**
- Residential License.
 - Building Construction License.
 - Mold Remediation License.
 - Hazardous Waste Treatment or Removal License.
10. **Occupational license taxes are required by:**
- cities and parishes.
 - the Louisiana Department of Revenue and Taxation.
 - the Internal Revenue Service.
 - the Louisiana State Licensing Board for Contractors.
11. **Refer to the illustration below for this question:**



In the drawing shown, the survey instrument reads 4.17 on the leveling rod. The height of the instrument is 5.43. The benchmark elevation is 214.56.

What is the elevation at the leveling rod?

- 215.82
- 218.73
- 219.99
- 224.16

12. **The last step in finishing a smooth concrete slab is to:**

- a.) trowel the surface.
- b.) float the surface
- c.) screed (strike off) the surface.
- d.) vibrate the surface.

13. **Given:** A building slab will be 25' x 90' x 8".

How many cubic yards of concrete will be needed?

(Note: Assume that the grade will be perfectly level and that there will be no crown or slope in the slab. Do not include waste or excess in your estimate.)

- a.) 27 cubic yards.
- b.) 56 cubic yards.
- c.) 167 cubic yards.
- d.) 180 cubic yards.

14. A rectangular building with a gable roof will be 80' x 36'. The rafters will be spaced 32" on center.

How many total rafters will be needed?

- a.) 30
- b.) 31
- c.) 60
- d.) 62

15. **When using a crane to lift a wood timber, the guide rope should be attached to the:**

- a.) hoisting rope.
- b.) hook.
- c.) wood timber.
- d.) jib.


16. ***Refer to the drawing below:***



The steel drawing shown above indicates a(n):

- a.) American Standard Beam.
- b.) Structural Tube.
- c.) Torque Strip.
- d.) Steel Track.

17. Refer to the drawing below for this question:



The corner of this molding is square. The miter joint shown is cut at a:

- a.) 45° angle.
- b.) 90° angle.
- c.) 180° angle.
- d.) 240° angle.

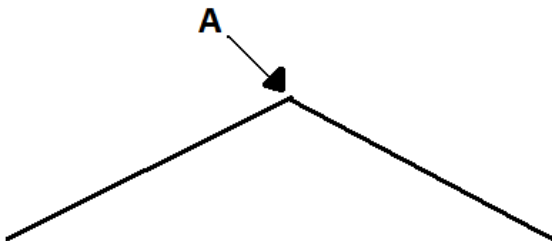
18. Hardwood strip flooring should be installed:

- a.) perpendicular (i.e., at a right angle) to the flooring joists.
- b.) parallel with the flooring joists.
- c.) diagonal to the flooring joists.
- d.) first perpendicular to the flooring joists, then parallel with the flooring joists.

19. If a freshly mixed mortar batch for a brick wall is too stiff to work, the mason should:

- a.) throw out the mortar and mix a new batch.
- b.) add more water to the mortar batch.
- c.) add more cement to the mortar batch.
- d.) heat the mortar batch.

20. Refer to the illustration below:



The type of shingles that would be installed at A would be:

- a.) valley shingles.
- b.) ordinary three-tab shingles.
- c.) ordinary two-tab shingles.
- d.) ridge shingles.